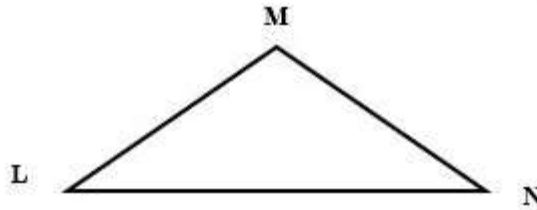
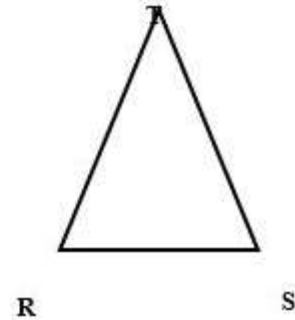
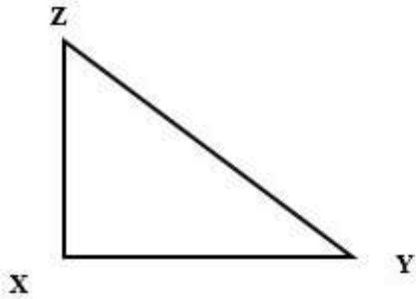


Name: _____

Date: _____

Homework: Triangle Journal Prompt

Joe draws the following triangles and claims they are all isosceles. Is his statement correct? How do you know?



Possible Vocabulary: Equilateral Triangle, Isosceles Triangle, Scalene Triangle, acute, right, obtuse
