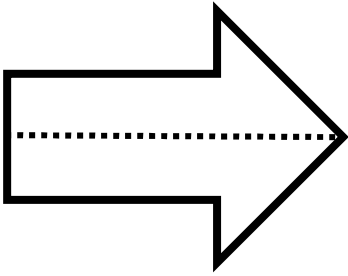


Name: \_\_\_\_\_


Date: \_\_\_\_\_

### Homework: Symmetry in Shapes

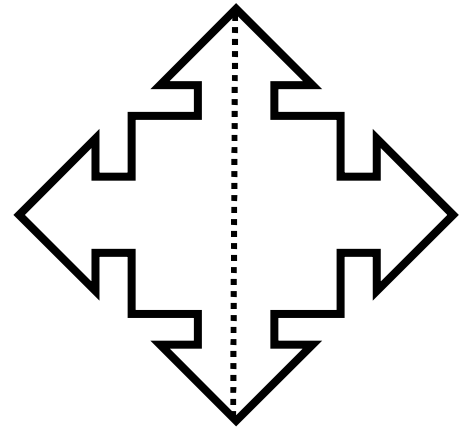
Directions: Do the dotted lines represent a line of symmetry? Write YES or NO. If the answer is no, explain why.



\_\_\_\_\_

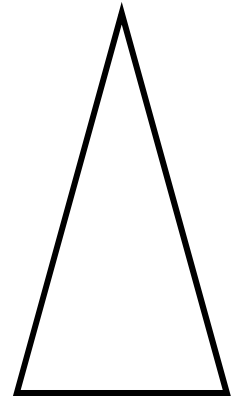
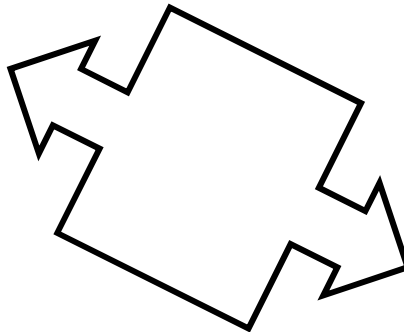



\_\_\_\_\_



\_\_\_\_\_

Directions: Draw the line(s) of symmetry for the figures below. Some may have more than one.



What is symmetry? How would you define it?